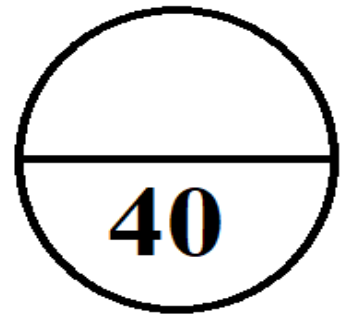


INDIAN SCHOOL SALALAH
SECOND TERM EXAMINATION(MARCH-2019)
ENVIRONMENTAL SCIENCE



Class:3___Time:2hrs

Name:_____ Max. mark:40

Roll no:_____Date:10-03-2019

Invigilator's Sign:_____ No.of pages:07

Scrutinizer's Sign:_____ Sub.Teacher's Sign:_____

Q1) Choose the correct answer from the bracket and fill in the blanks:

(4x $\frac{1}{2}$ =2)

- a) Animals that eat the flesh of dead animals are called_____.
- (a. omnivores b. scavengers c. carnivores)
- b) The _____repairs leaky pipes and taps.
- (a. tailor b. plumber c. carpenter)
- c) _____is the solid form of water.
- (a. Ice b. Water c. Water vapour)
- d) _____are the most important part that help birds in flying.
- (a. Beaks b. Wings c. Claws)

Q2) Give two examples: (3x1=3)

- a) Migratory birds:_____,_____
- b) Milk products:_____,_____
- c) Gases present in the air:_____,_____

Q3) Circle the odd one out:

(4x^{1/2}=2)

- a) **Pet animals:** Dog, Tiger, Cat, Rabbit
- b) **Oilseeds:** Sunflower, Peanut, Rice, Coconut
- c) **Underground water:** Well, Ponds, Tube well, Hand pump
- d) **Hobby:** Engineer, Drawing, Reading books, Painting

Q4) Match the following:

(5x^{1/2}=2^{1/2})

A	B	C
1. Tiger	a. Stitches clothes	1. _____
2. Rabbit	b. Mends shoes	2. _____
3. Tailor	c. Clean the air	3. _____
4. Cobbler	d. Burrow	4. _____
5. Trees	e. Cave	5. _____

Q5) Write True or False:

(4x^{1/2}=2)

- a) Monkeys live on trees. _____
- b) Electrician repairs cars and scooters. _____
- c) We get energy from food. _____
- d) Cow is the only animal that gives us milk. _____

Q6) Complete the next pair:

(5x^{1/2}=2^{1/2})

- a) Lion : Legs :: Fish: _____
- b) Solid: Pencil :: Liquid: _____
- c) Protective food: Vegetables :: Body building food: _____
- d) Root: Carrot :: Stem: _____
- e) West Indian food: Dhokla :: East Indian food: _____

Q7) Name the following:

(4x $\frac{1}{2}$ =2)

- a) The work people do to earn money. _____
- b) A person who grows food for us. _____
- c) Animals that eat only plants. _____
- d) A person who works for newspaper or news channels on the television or radio. _____

Q8) Tick the correct answer:

(3x $\frac{1}{2}$ =1 $\frac{1}{2}$)

a) An instrument used to see tiny organisms that we cannot see with our eyes.

(a. Stethoscope b. Microscope c. Telescope)

b) The largest ocean on the earth.


(a. Pacific b. Indian c. Arctic)

c) Ship of the desert.

(a. Deer b. Arabian Oryx c. Camel)

Q9) Label the parts of a bird.

(4x $\frac{1}{2}$ =2)



Q10) Define:

(3x1=3)

a) Rainwater harvesting: _____

b) Pet animals: _____

c) Child labour: _____

Q11) Identify the pictures:

(4x1/2=2)

a)b)



c)d)



Q12) Solve the crossword puzzle:

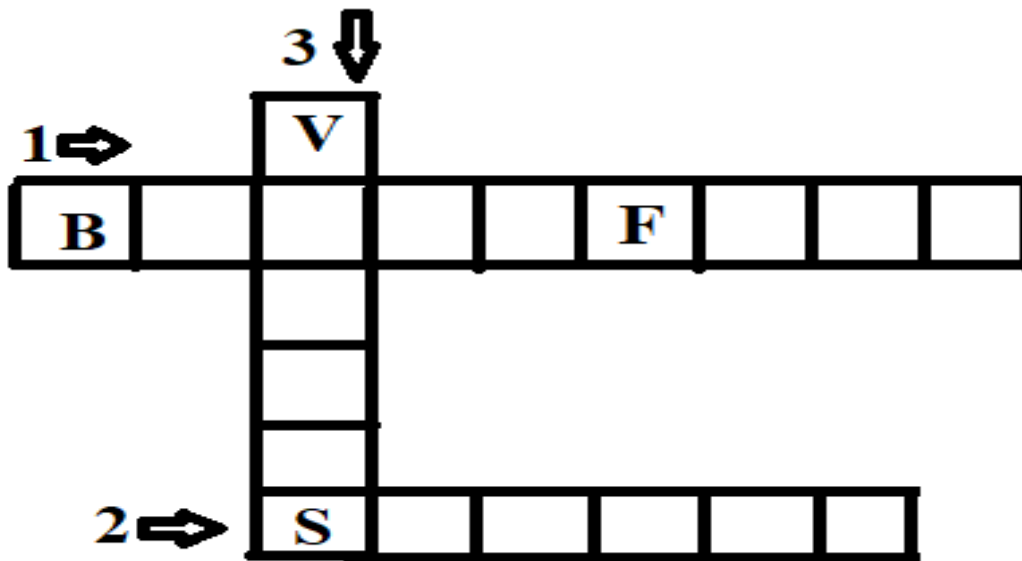
(3x1/2=1 1/2)

Across ⇒

- 1) The most important meal of the day.
- 2) This adds taste and colour to the food we eat.

Down ↓

- 3) People who do not eat any animal products.



Q13) Answer the following in one sentence:

(4x1=4)

- a) How do different animals use their tails?

- b) What is meant by 'Balanced diet'?

c) How does air get polluted?

d) What is the basic right of a child?

Q14) Write the difference between:

(2x1=2)

Wild animals	Domestic animals

Q15) Give reason:(4x1=4)

a) Eagles and kites have strong claws.

b) We need to have a leisure time.

c) Growing children need to eat more than elderly people.

d) We should boil water before drinking.

Q16) Answer in detail:

a) Write any two uses of soil.

(2x1=2)

1) _____

2) _____

b) Why do birds build nests? (2 points)

(2x1=2)

1) _____

2) _____
