

INDIAN SCHOOL SALALAH
SECOND TERM EXAMINATION, 2018-19

40

Subject: Mathematics

Date:

Class: III.....

Duration: 2 hours

Roll No:.....

Invigilator's Sign.....

Name:.....

Scrutinizer's Sign.....

1. FILL IN THE BLANKS: (5)

- a) The standard unit of weight is
- b) Any number multiplied by zero gives.....
- c) 1 rupee is equal to paise.
- d) If we add 1 to any odd number we get an number.
- e) The answer of multiplication is known as.....
- f) $500\text{ g} + 500\text{g} = \dots\dots\dots\text{kg}$.
- g) There are ,50 paise in one rupee.
- h) 20 divided by 1 gives
- i) is the process of repeated subtraction.
- j) There are eyes for 10 dogs.

2. WRITE THE NUMBER NAMES FOR THE FOLLOWING: (3)

- a) $570 = \dots\dots\dots$
- b) $409 = \dots\dots\dots$
- c) $635 = \dots\dots\dots$

3. **WRITE THE EXPANDED FORM:** (2)

a) $208 = \dots + \dots + \dots$

b) $367 = \dots + \dots + \dots$

4. **CONVERT THE FOLLOWING:** (4)

a) ₹ 25.50 = p

e) 800 p = ₹.....

b) 3kg 245g =g

f) 5000g =kg

c) 4kg =g

g) 50p = ₹.....

d) ₹ 12.00 =p

h) 1kg =g

5. **WRITE THE 2 DIVISION FACTS:** (2)


$7 \times 8 = 56$

a)

b).....

6. **PUT THESE MANGOES EQUALLY IN THE BOWLS AND** (1½)

THEN COMPLETE:

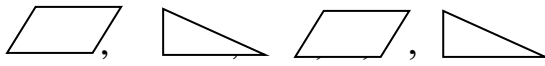


___ ÷ ___ = ___

7. **COMPLETE THE PATTERN:** (3)

a) 29 , 31 , 33 ,..... ,

b) 70×8 , 60×7 , 50×6 ,..... ,.....

c)  ,

8. **MULTIPLY THE FOLLOWING:** (4)


a) 5 4

 × 1 2

b) 2 0 3

 × 4

9. **OBSERVE THE PICTURE AND ANSWER:** (1½)



There are flowers.

There are petals for each flower.

Multiplication fact =.....

10. **COLOUR THE EVEN NUMBERS:** (3)

249	900	348	477
671	321	892	566
444	706	131	259

11. **DIVIDE USING REPEATED SUBTRACTION:**

(2)

$$20 \div 5 = \dots\dots$$

12. **TICK THE CORRECT ANSWER:**


(1)

a) Nisha and Raj arranged the moon and the stars as follows.

Nisha's arrangement



Raj's arrangement



What more should Nisha keep to look like Raj ?

1)



2)

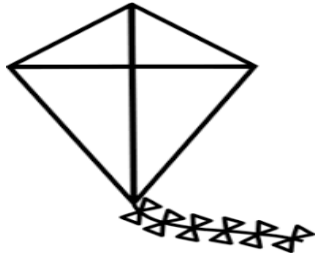


3)



13. **SHOPPING:**


(3)



₹ 10.50



₹ 38.00



₹ 79.00

a) Find the total cost of a car and a kite.

b) Find the cost of two dolls.

14. **SOLVE THE PROBLEMS:**

(3)

a) Tom has ₹ 88.00 with him. He bought a toy for ₹56.00. How much money is left with him ?

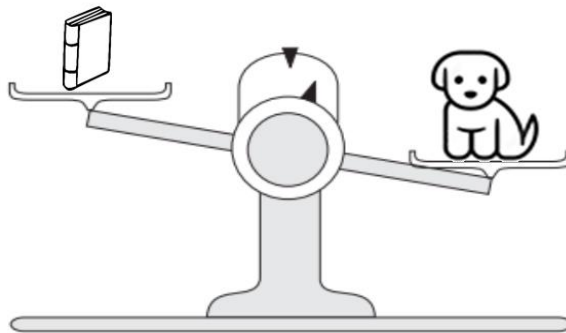
b) Sonu reads 63 pages in a day. How many pages will he read in 3 days?

15. **CHOOSE THE CORRECT ANSWER:**

(2)

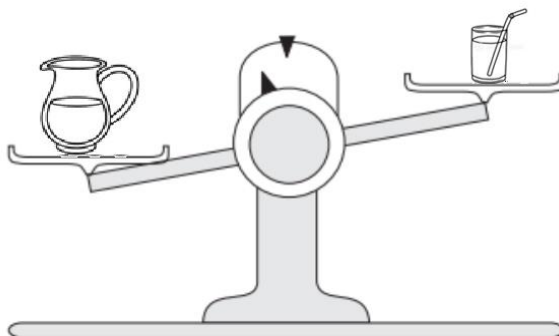
(heavier than , lighter than or equal to)

a)



The book weighs the puppy.

b)



The jug weighs the glass of water.